

Name:.....





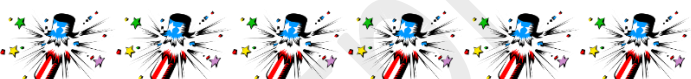
Class:.....

Date:.....

Picture Graphical Interpretation

Help our Talented  Turtle to answer the following question.

The table shows the crackers purchased by the children during Diwali. Look at the picture table and fill in the blanks.

Children	Crackers purchased
Sita	
Lakshman	
Bharath	
Ram	
Nakul	

- purchased more crackers.
- Sita purchased crackers more than Ram.
- Ram and Lakshman together purchased crackers.
- Nakul purchased crackers less than Bharath.
- and purchased equal numbers of crackers.
- Altogether how many crackers were purchased by the children?
.....

Happy Learning  Happy Diwali

