





Name:.....

Class:.....




Date:.....

Autumn Fall Word Problems

Help our friend  Delightful Deer to solve the problems.

1. Riya went for an autumn fall walk and she collected five  fall leaves, two  pinecones, three  chestnuts and four  acorns. Altogether, how many fall items did she collect?

--	--


2. Amy collected two  yellow leaves, four  orange leaves and six  brown leaves from her backyard. Find out total leaves with Amy.

--	--


Name:.....

Class:.....

Date:.....

3. Emma picked 17  fall leaves and gave nine leaves to her sister. Now how many leaves are left with Emma?

--	--


4. On the way to home Nicky collected 14  pinecones, few fell on the way. When she reached home only 11 were left. How many pinecones, fell down?

--	--

Name:.....

Class:.....

Date:.....

5. Sheena and her four friends, each picked  eight fall items, from the park. Totally how many fall items are collected by them?

--	--

6. Riyan collected 24  chestnuts and if he has to share it with his five cousins, how many chestnuts will each will get?

--	--

Name:.....

Class:.....

Date:.....

Answers:

1. $5+2+3+4 = 14$

2. $2+4+6 = 12$

3. $17-9 = 8$

4. $14-11 = 3$

5. $8*5(1+4) = 40$

6. $24/6(1+5) = 4$